

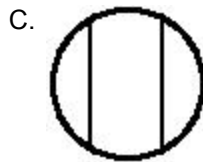
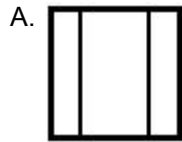
**3rd Math 1.2b**

Name: \_\_\_\_\_

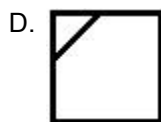
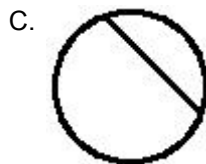

Class: \_\_\_\_\_

Date: \_\_\_\_\_

1. Which picture shows 3 equal parts?




2. Which picture shows 2 equal parts?




3. Which picture shows 4 equal parts?


A.




B.



C.

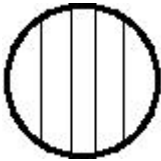


D.

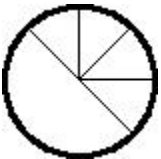


4. Which picture shows 5 equal parts?

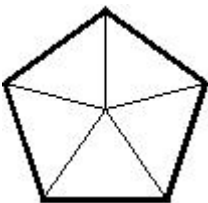
A.



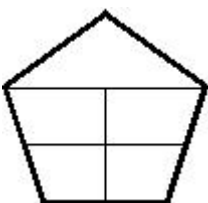
B.



C.

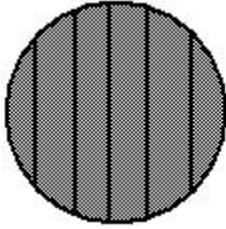


D.

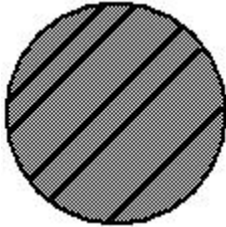


5. Which picture shows 6 equal parts?

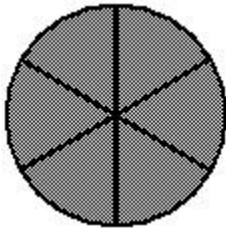
A.



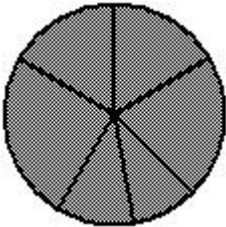
B.



C.

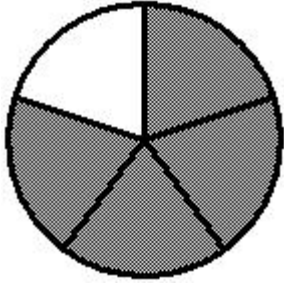


D.

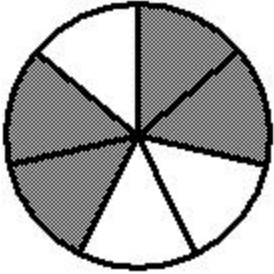


6. Which shows 4 out of 5 parts shaded?

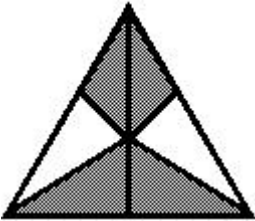
A.




B.



C.

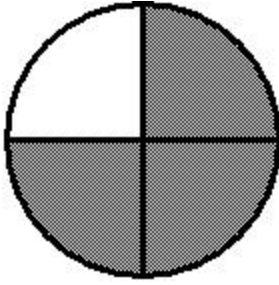


D.

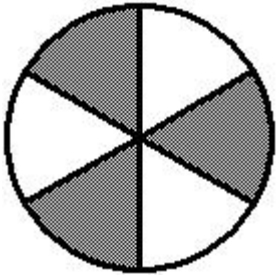


7. Pick the picture that shows 3 out of 6 parts are shaded.

A.



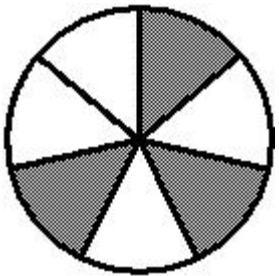
B.



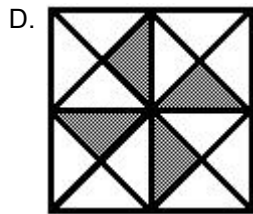

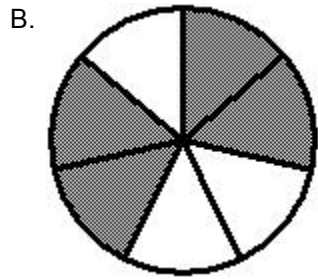
C.



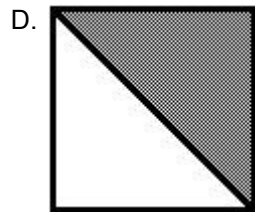
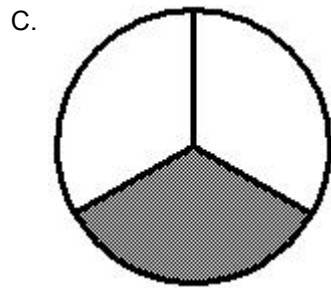
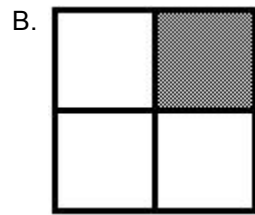

D.



8. Pick the picture that shows 4 out of 10 parts are shaded.



9. Pick the picture that shows 1 out of 2 parts are shaded.



10. Pick the picture that shows 3 out of 7 parts are shaded.

